

AL-SIDDEEQ MONTESSORI & SECONDARY SCHOOL

Kallar Syedan Road Sagri Rawalpindi. Near DHA-7 Gate 1, Rawalpindi. 051-4680500

(Entry Test...2026)

Model Paper for Admission to Class 1-One

Reg. No.						NAME (Block Letters)												
----------	--	--	--	--	--	-------------------------	--	--	--	--	--	--	--	--	--	--	--	--

Marks Secured					Examiner's Remarks / Signature
Marks Allocated	20	15	15	50	
Part	English	Urdu	Maths	Total	

(Time: 1:30 Hour(s))

(Max. Marks: 50)

Note: - Write your Name and Reg. No. in the given space. Attempt confidently. Overwriting, cutting or any other mode of alteration is not allowed.

Part I—English—20 Marks

Q#01. Fill in the blanks. (*Writing and Recognition of Alphabets ‘A’ to ‘Z’ and ‘a’ to ‘z’*) (0.25×8=2)

- i. P _____ D _____

iii. i, j _____, _____
- ii. G _____ V _____ X

iv. n _____, t _____, v

Q#02. Use „A“, „An“ or „The“. (*The use of articles*) (0.5×4=2)

- i. _____apple

ii. _____sun

iii. _____chair

iv. _____Ice-cream

Q#03. Write names of Fruits starts with. (*Vocabulary (Names of Colours, Flowers, Fruits, Vegetables, Seasons, Months, Days, Cities, Animals, Birds & Parts of Body are included)*) (0.5×4=2)

- i. B _____

iii. M _____
- ii. O _____

iv. G _____

Q#04. Complete the Words. (1×5=5)

- i. Te__cher

iii. Fo__est
- ii. P__tato

iv. p__ncil

Q#05. Write two rhyming words of these sounds. (1×2=2)

- i. oi _____

ii. ea _____

Q#06. Make Sentences. (1×2=2)

sleep	
car	

Q#07. Write at least four lines on “my pet”. (4)

Q#08. Fill in the blanks. (0.5×2=1)

1- _____are flowers. (this, these)

2- _____a nice boy. (she, he)

(0.5×5=2.5)

Q1. حروف تہجی لکھیں۔

پ _____ ر _____ م _____
ج _____ گ _____

(0.5×5=2.5)

Q2. توڑ بنائیں۔

i. تتلی
ii. کیلا
iii. عزت
iv. بلی
v. رانی

(0.5×5=2.5)

Q3. جوڑ لکھیں۔

i. ک-پ-ڑ-یے
ii. ن-ے-ک-ی
iii. ع-و-ر-ت
iv. پ-ر-ن-و-یے
v. پ-ا-ک-ی-ز-ہ

(1×2=2)

Q4. جملے بنائیں۔

i. بادل
ii. پارک

(1×3=3)

Q5. مختصر جوابات تحریر کریں۔

i. کوئی سے چار پرندوں کے نام لکھیں؟
ii. سبز رنگ کی دو سبزیوں کے نام لکھیں؟
iii. ج سے شروع ہونے والے مہینوں کے نام لکھیں؟

(2.5)

Q6. مضمون لکھیں: "میرا سکول"

Part III—Mathematics—15 Marks

Q#01. Write the number that come..... (0.5 x 4 =2)

	<u>Before</u>	<u>After</u>	<u>between</u>
i.	_____, 70		
ii.		59, _____	
iii.			30, _____, 32
iv.	_____, 46		

Q#02. Write these numbers in words and numbers : (1 x 4=4)

- i. 13 = _____

iii. Twenty nine =
- ii. 25 = _____

iv. fifty =

Q#03. Complete these. (0.5 x 2=1)

- i. 2 x 5 =

ii. 2 x 7 =





Q#04. Solve these according to given sign : (1 x 3=3)

T O	T O	T O
1 3	1 2	1 8
+ 4	+ 2 0	- 5

Q#05. Circle even numbers. (.5 x 4=2)

16 5 13 8 20 18 15

Q#06. Match the columns. (0.5 x 4 =2)

i.			Square
ii.			Circle
iii.			Triangle
iv.			Rectangle

Q#07. Write the missing number. (0.25 x 4 =1)

54, 53, _____, _____, _____, _____

Outline/Contents of Question Paper

English: Recognition of alphabets “A” to „Z” and “a” to “z”. Use of “A”, “An” and “The”, different type of vocabulary as mentioned in the paper, completion of different words, sentences formation and a short paragraph on simple sentences in any simple topic. Prescribed book of oxford of Junior class is recommended.

Urdu: Recognition of Urdu alphabets. Construction of different small and simple Urdu words. Sentences and question answers are included. A essay on a very simple topic is also included in junior classes. Prescribed book is Punjab text book.

Mathematics: Simple concepts of maths like missing counting, number in words, backward counting 1 till 100. Concept of multiplication, even and odd numbers are included. Concepts of different shapes, coin can also be asked. Addition and subtraction of 2 numbers up to 20.